

# Chapter Test 14

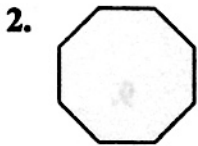
Read each question carefully. Write the letter for your answer on the line provided.

Identify the figures.



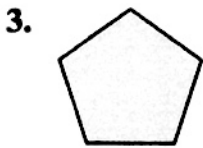
- A. hexagon                      C. pentagon  
B. octagon                      D. triangle

1. \_\_\_\_\_



- F. hexagon                      H. pentagon  
G. octagon                      I. triangle


2. \_\_\_\_\_



- A. hexagon                      C. pentagon  
B. octagon                      D. triangle

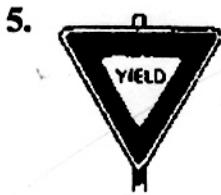
3. \_\_\_\_\_

For Exercises 4 and 5, describe each two-dimensional figure. Then identify the figure.



- F. 3 sides, 3 angles, triangle  
G. 4 sides, 4 angles, quadrilateral  
H. 5 sides, 5 angles, pentagon  
I. 6 sides, 6 angles, hexagon

4. \_\_\_\_\_



- A. 3 sides, 3 angles, triangle  
B. 4 sides, 4 angles, quadrilateral  
C. 5 sides, 5 angles, pentagon  
D. 6 sides, 6 angles, hexagon

5. \_\_\_\_\_

6. Which polygon has 4 sides of equal length?

- F. rectangle                      H. trapezoid  
G. square                      I. hexagon

6. \_\_\_\_\_