


# Chapter 13 Test

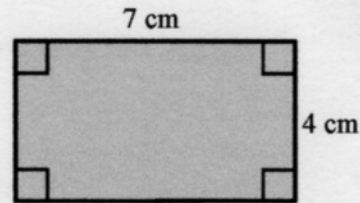
Read each question carefully. Write your answer on the line provided.  
Provide evidence/proof of your answer. **SHOW YOUR WORK.**

1. Find the area of the shaded figure.




1. \_\_\_\_\_

2. Find the area of the figure.



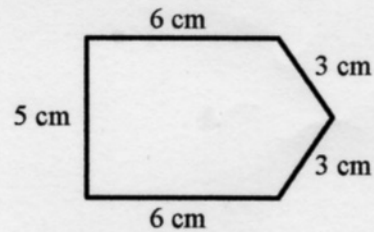
2. \_\_\_\_\_

3. Find the perimeter of the figure.



3. \_\_\_\_\_

4. Find the perimeter of the figure.



4. \_\_\_\_\_


5. Which rectangle has the same area as the figure in Exercise 3, but a different perimeter?

A. 2 m



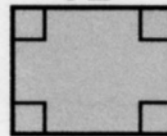
9 m

B. 4 m




4 m

C. 5 m



4 m

D. 3 m



3 m

5. \_\_\_\_\_